





Making 5 (Five Frames)




$$\underline{\quad} + \underline{\quad} = \underline{5}$$



$$\underline{\quad} + \underline{\quad} = \underline{5}$$



$$\underline{\quad} + \underline{\quad} = \underline{5}$$



$$\underline{\quad} + \underline{\quad} = \underline{5}$$