




$$\underline{10} - \underline{4} = \underline{\quad}$$




$$\underline{10} - \underline{7} = \underline{\quad}$$



$$\underline{10} - \underline{6} = \underline{\quad}$$



$$\underline{10} - \underline{5} = \underline{\quad}$$



$$\underline{10} - \underline{8} = \underline{\quad}$$



$$\underline{10} - \underline{2} = \underline{\quad}$$