




What Time Is It?

Look at the clock and write the time of the first clock in the space under it. Now, add an hour and write the time and the clock hands to the second clock.




Add 1 hour




Add 1 hour




Add 1 hour





Add 1 hour





Add 1 hour



Add 1 hour





Add 1 hour



Add 1 hour





Add 1 hour



Add 1 hour



Add 1 hour



Add 1 hour

