



What Time Is It?

Look at the clock and write the time of the first clock in the space under it. Now, add the minutes indicated and write the time and the clock hands to the second clock.



Add 15 Minutes



Add 30 Minutes




Add 23 Minutes



Add 50 Minutes




Add 5 Minutes



Add 10 Minutes




Add 33 Minutes



Add 11 Minutes




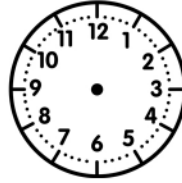
Add 45 Minutes



Add 35 Minutes



Add 14 Minutes



Add 21 Minutes

