




What Time Is It?

Look at the clock and write the time of the first clock in the space under it. Now, subtract an hour and write the time and the clock hands to the second clock.




Subtract
1 hour




Subtract
1 hour




Subtract
1 hour




Subtract
1 hour





Subtract
1 hour



Subtract
1 hour





Subtract
1 hour



Subtract
1 hour





Subtract
1 hour



Subtract
1 hour



Subtract
1 hour



Subtract
1 hour

