



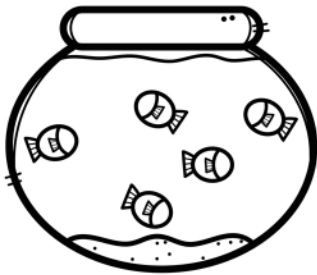
Color out the items to be taken away from 5.




$$5 - 3 = \underline{\quad}$$



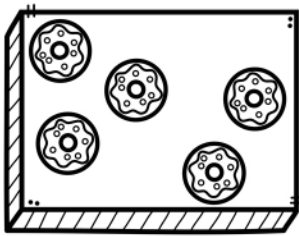
$$5 - 4 = \underline{\quad}$$




$$5 - 1 = \underline{\quad}$$



$$5 - 2 = \underline{\quad}$$




$$5 - 0 = \underline{\quad}$$



$$5 - 5 = \underline{\quad}$$



$$5 - 2 = \underline{\quad}$$



$$5 - 3 = \underline{\quad}$$