

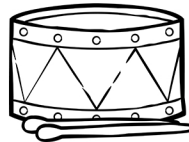






Determine how much change is owed after paying for each item with a \$1.00 bill.

**36¢****73¢****55¢****88¢****85¢****64¢****25¢****72¢**