







Determine how much change is owed after paying for each item with a \$1.00 bill.

**52¢****24¢****45¢****61¢****34¢****56¢****13¢****89¢**