
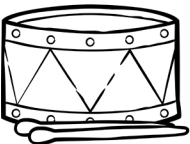






Determine how much change is owed after paying for each item with a \$1.00 bill.

**20¢****90¢****50¢****30¢****40¢****60¢****10¢****80¢**