





Determine how much change is owed after paying for each item with a \$1.00 bill.




65¢




35¢




25¢




5¢



55¢



40¢



75¢



90¢