

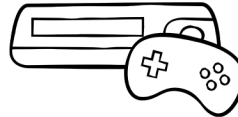







Determine how much change is owed after paying for each item with a \$1.00 bill.

**7¢****20¢****12¢****18¢****5¢****15¢****10¢****3¢**