





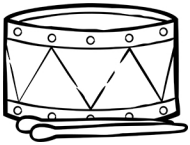
Determine how much change is owed after paying for each item with a \$1.00 bill.




25¢




75¢



50¢



\$1.00



\$1.00



25¢



50¢



75¢