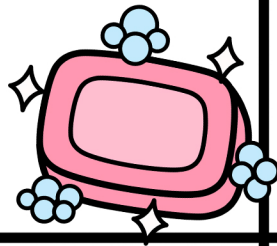


Solve the multiplication word problems.

Jamie went to 3 stores. At each store, he bought 5 bars of soap. How many bars of soap did he buy?



The cook made 2 pancakes each for 9 kids. How many pancakes did he make total?



There are 4 carousels at the carnival. Each carousel had 2 horses. How many horses are there total?




Thad had 7 friends. He gave each friend 2 bars of chocolate. How many bars of chocolate did he have altogether?



Alex had 7 bouquets of flowers. Each bouquet had 5 flowers in them. How many flowers did he have in all the bouquets?

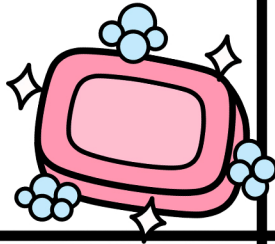


There are 9 flowers in the field. Each flower had 4 bees on each flower. How many bees were in the field?



Solve the multiplication word problems.

Jamie went to 3 stores. At each store, he bought 5 bars of soap. How many bars of soap did he buy?

**15**

The cook made 2 pancakes each for 9 kids. How many pancakes did he make total?

**18**

There are 4 carousels at the carnival. Each carousel had 2 horses. How many horses are there total?

**8**

Thad had 7 friends. He gave each friend 2 bars of chocolate. How many bars of chocolate did he have altogether?

**14**

Alex had 7 bouquets of flowers. Each bouquet had 5 flowers in them. How many flowers did he have in all the bouquets?

**35**

There are 9 flowers in the field. Each flower had 4 bees on each flower. How many bees were in the field?

**36**