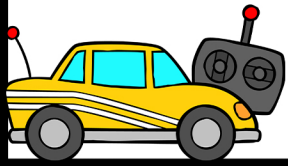



Solve the multiplication word problems.


A store sells 24 toys each day. How many toys will they sell in 7 days?



There are 6 chickens in the coop. Each chicken lays 8 eggs. How many eggs were in the coop?




Sammy has 6 fish tanks. He buys 9 fish to put in each tank. How many fish did he buy?



There are 4 kids in the pool. Each kid has 3 beach balls. How many balls were there in total?



Ava makes 2 meals a day for 6 people. How many meals does she make in total?




A castle has 3 fields. Each field has 10 unicorns. How many unicorns are there?



Solve the multiplication word problems.


A store sells 24 toys each day. How many toys will they sell in 7 days?

168




There are 6 chickens in the coop. Each chicken lays 8 eggs. How many eggs were in the coop?

48



Sammy has 6 fish tanks. He buys 9 fish to put in each tank. How many fish did he buy?

54




There are 4 kids in the pool. Each kid has 3 beach balls. How many balls were there in total?

12



Ava makes 2 meals a day for 6 people. How many meals does she make in total?

12



A castle has 3 fields. Each field has 10 unicorns. How many unicorns are there?

30

