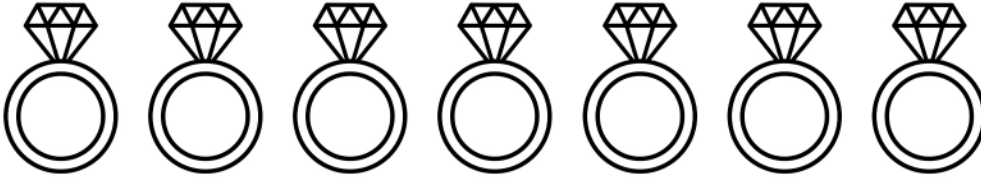


Name: \_\_\_\_\_

Date: \_\_\_\_\_

Count the objects. Write the number then write if it's odd or even.




How many rings? \_\_\_\_\_

Odd or even? \_\_\_\_\_




How many cones? \_\_\_\_\_

Odd or even? \_\_\_\_\_




How many oranges? \_\_\_\_\_

Odd or even? \_\_\_\_\_




How many snails? \_\_\_\_\_

Odd or even? \_\_\_\_\_



How many worms? \_\_\_\_\_

Odd or even? \_\_\_\_\_



How many frogs? \_\_\_\_\_

Odd or even? \_\_\_\_\_