



Count the objects. Write the number then write if it's odd or even.



_____ is an _____ number.



_____ is an _____ number.



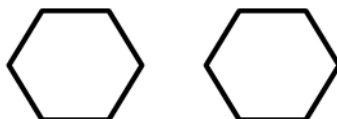
_____ is an _____ number.



_____ is an _____ number.



_____ is an _____ number.



_____ is an _____ number.