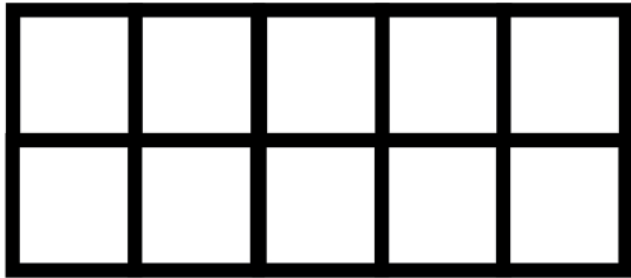
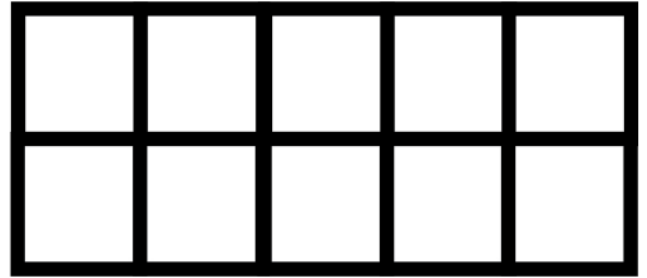


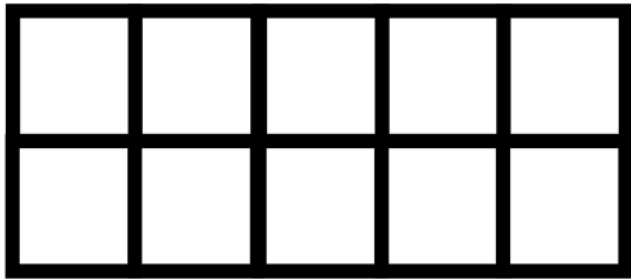
Complete the problem. Use a cotton swab to fill in the ten frame.



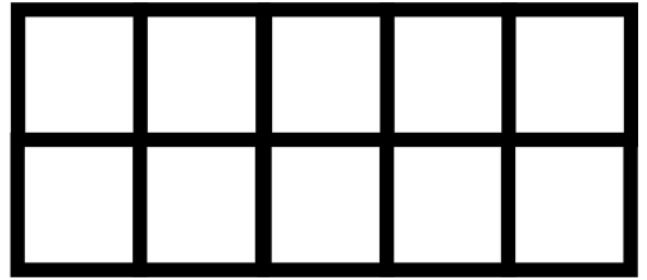
$$\underline{\quad} + 3 = \underline{\quad} 5$$



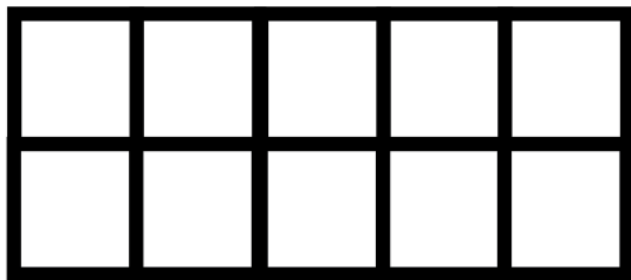
$$\underline{\quad} + 1 = \underline{\quad} 5$$



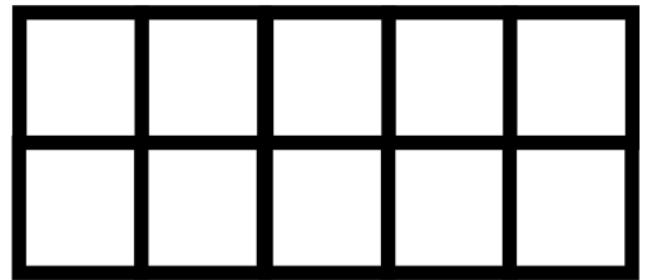
$$\underline{\quad} + 2 = \underline{\quad} 5$$



$$\underline{\quad} + 4 = \underline{\quad} 5$$



$$\underline{\quad} + 0 = \underline{\quad} 5$$



$$\underline{\quad} + 5 = \underline{\quad} 5$$