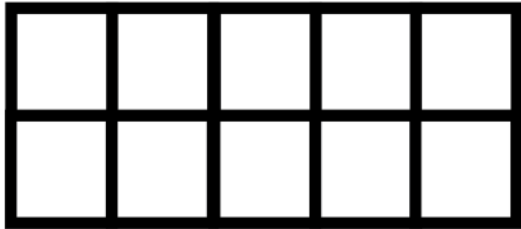
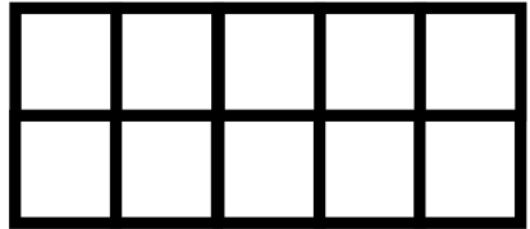


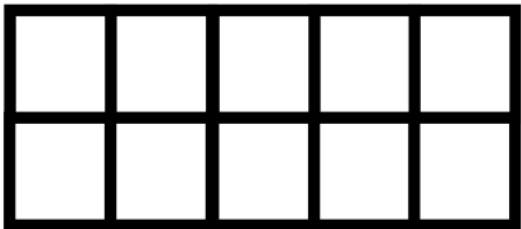
Complete the problem. Use a cotton swab to fill in the ten frame.



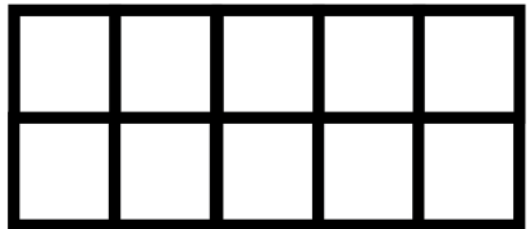
$$\underline{\quad} + \underline{5} = \underline{10}$$



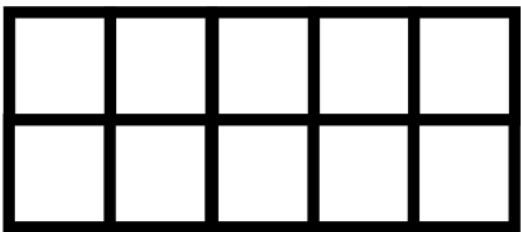
$$\underline{\quad} + \underline{4} = \underline{10}$$



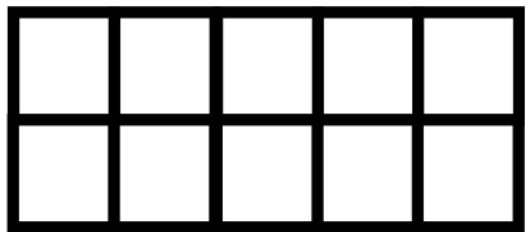
$$\underline{\quad} + \underline{7} = \underline{10}$$



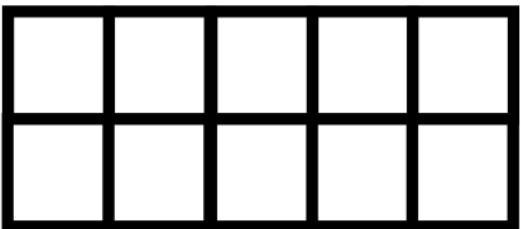
$$\underline{\quad} + \underline{6} = \underline{10}$$



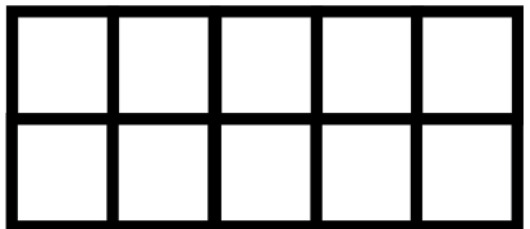
$$\underline{\quad} + \underline{2} = \underline{10}$$



$$\underline{\quad} + \underline{3} = \underline{10}$$



$$\underline{\quad} + \underline{8} = \underline{10}$$



$$\underline{\quad} + \underline{4} = \underline{10}$$