


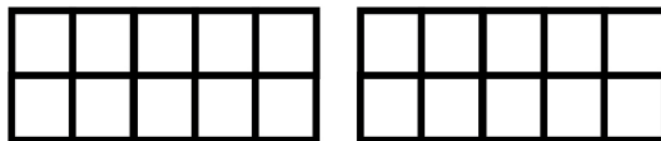
Complete the problem. Use a cotton swab to fill in the ten frame.



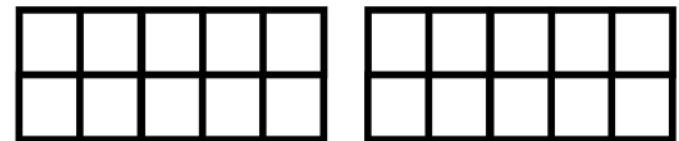
$$\underline{\quad} + \underline{17} = \underline{20}$$



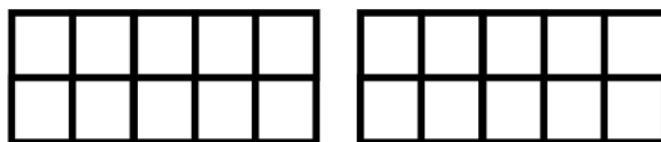
$$\underline{\quad} + \underline{11} = \underline{20}$$



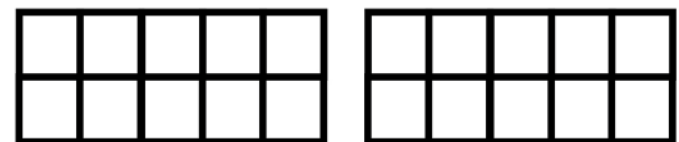
$$\underline{\quad} + \underline{12} = \underline{20}$$



$$\underline{\quad} + \underline{7} = \underline{20}$$



$$\underline{\quad} + \underline{16} = \underline{20}$$



$$\underline{\quad} + \underline{14} = \underline{20}$$



$$\underline{\quad} + \underline{13} = \underline{20}$$



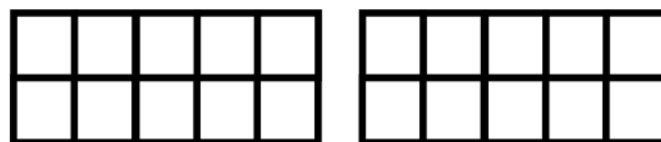
$$\underline{\quad} + \underline{18} = \underline{20}$$



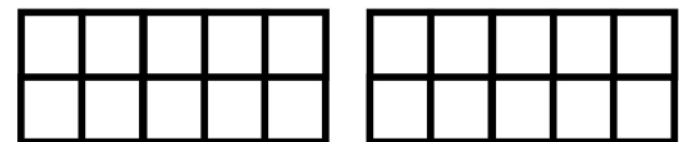
$$\underline{\quad} + \underline{9} = \underline{20}$$



$$\underline{\quad} + \underline{15} = \underline{20}$$



$$\underline{\quad} + \underline{19} = \underline{20}$$



$$\underline{\quad} + \underline{8} = \underline{20}$$