

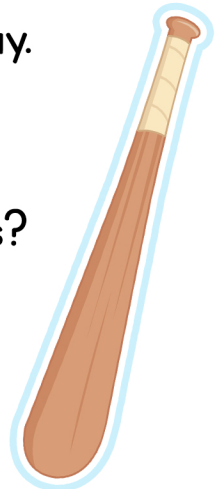
ELAPSED TIME

Elapsed time is the amount of time that passes between two events.



Andy has two baseball games on Saturday.
The first game starts at 2:30pm.
The second game starts at 6:00pm
How much time is in between the games?

ELAPSED TIME :
3 hours 30 minutes



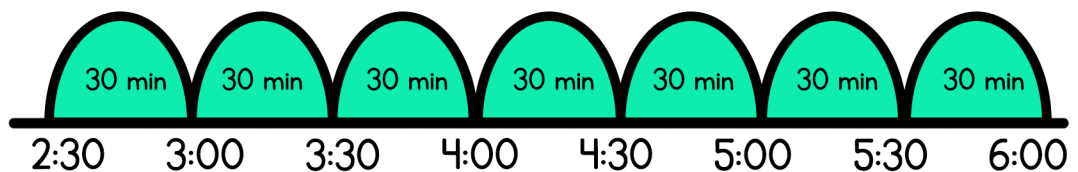
T-Chart

| time | hours and minutes |
|------|-------------------|
| 2:30 | start + |
| 3:00 | half hour |
| 3:30 | half hour |
| 4:00 | half hour |
| 4:30 | half hour |
| 5:00 | half hour |
| 5:30 | half hour |
| 6:00 | half hour |

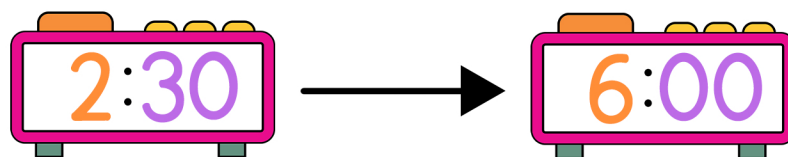
add these together =
elapsed time



Number Line



Clocks



How many hours passed?