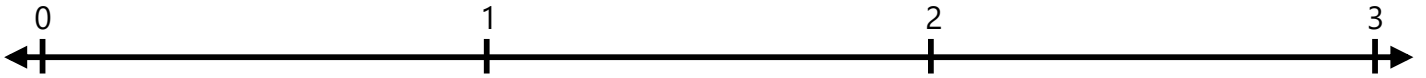


### Number Lines - Fractions

Identify where each set of points should be placed on the number lines below.

1.  $2\frac{1}{2}$      $\frac{1}{2}$



2.  $\frac{1}{2}$      $1\frac{1}{2}$



3.  $\frac{1}{2}$      $2\frac{1}{2}$



4.  $1\frac{1}{2}$      $2\frac{1}{2}$



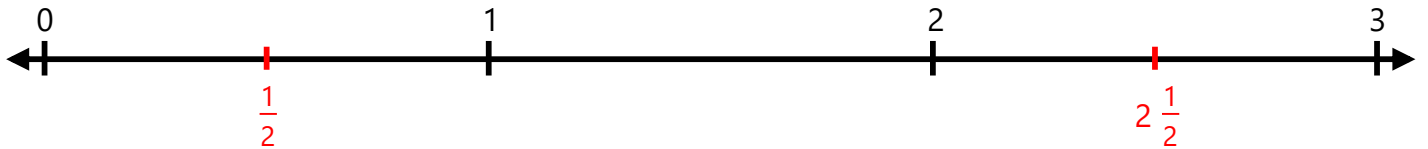
5.  $1\frac{1}{2}$      $\frac{1}{2}$



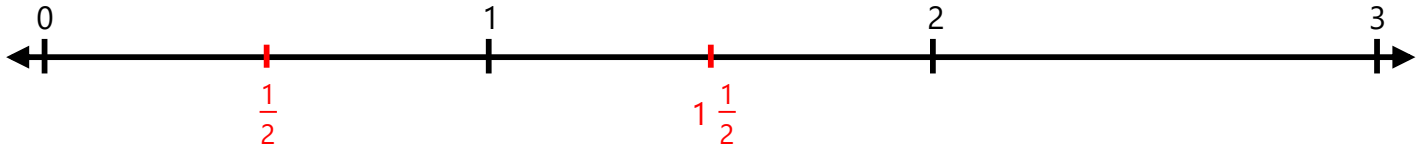
### Number Lines - Fractions

Identify where each set of points should be placed on the number lines below.


1.  $2\frac{1}{2}$      $\frac{1}{2}$



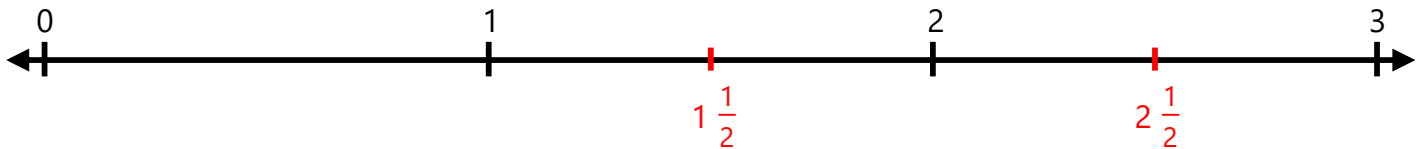
2.  $\frac{1}{2}$      $1\frac{1}{2}$



3.  $\frac{1}{2}$      $2\frac{1}{2}$



4.  $1\frac{1}{2}$      $2\frac{1}{2}$



5.  $1\frac{1}{2}$      $\frac{1}{2}$

