

Number Lines - Fractions

Identify where each set of points should be placed on the number lines below.

1. $5\frac{1}{2}$ $7\frac{1}{2}$



2. $7\frac{1}{2}$ $5\frac{1}{2}$



3. $7\frac{1}{2}$ $6\frac{1}{2}$



4. $6\frac{1}{2}$ $5\frac{1}{2}$



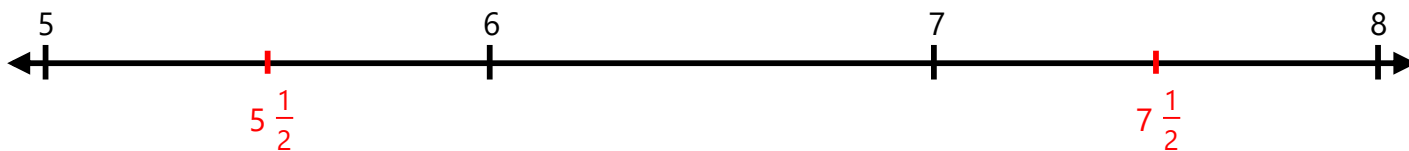
5. $6\frac{1}{2}$ $7\frac{1}{2}$



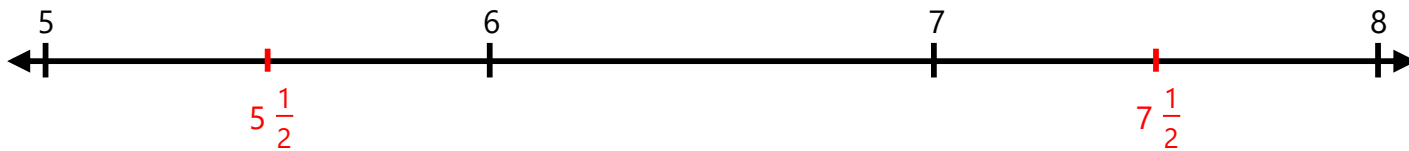
Number Lines - Fractions

Identify where each set of points should be placed on the number lines below.

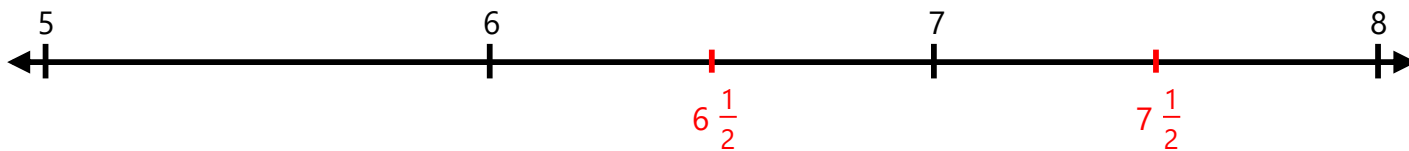
1. $5\frac{1}{2}$ $7\frac{1}{2}$



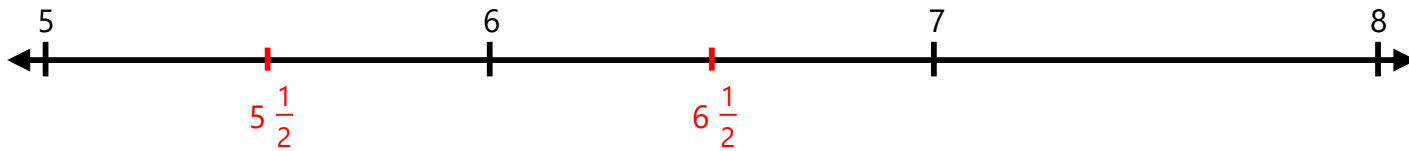
2. $7\frac{1}{2}$ $5\frac{1}{2}$



3. $7\frac{1}{2}$ $6\frac{1}{2}$



4. $6\frac{1}{2}$ $5\frac{1}{2}$



5. $6\frac{1}{2}$ $7\frac{1}{2}$

