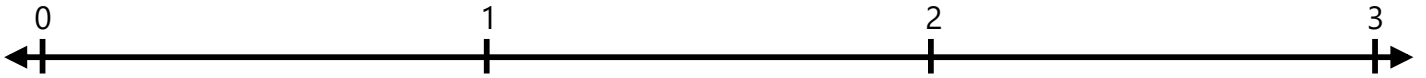


**Number Lines - Fractions**

Identify where each set of points should be placed on the number lines below.

1.  $2\frac{2}{3}$      $\frac{2}{3}$



2.  $2\frac{1}{3}$      $\frac{1}{3}$



3.  $1\frac{1}{3}$      $2\frac{2}{3}$



4.  $1\frac{1}{3}$      $\frac{1}{3}$



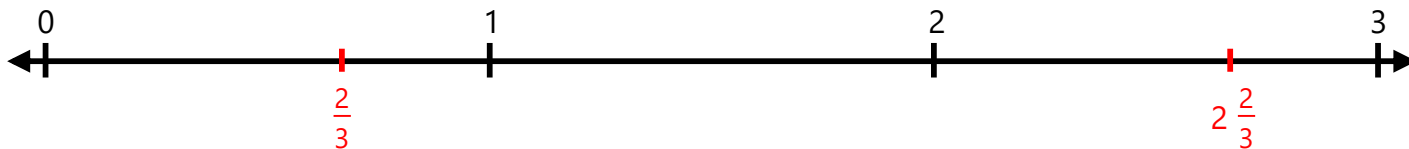
5.  $\frac{1}{3}$      $1\frac{1}{3}$



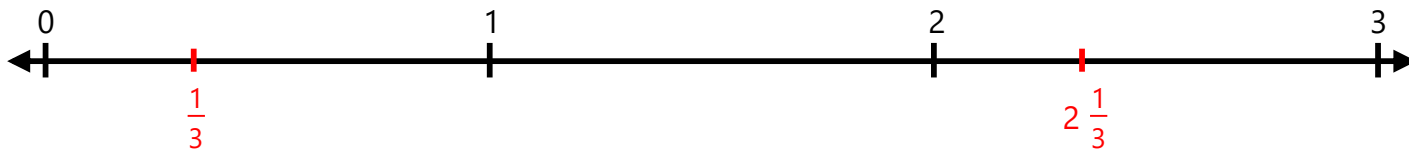
### Number Lines - Fractions

Identify where each set of points should be placed on the number lines below.

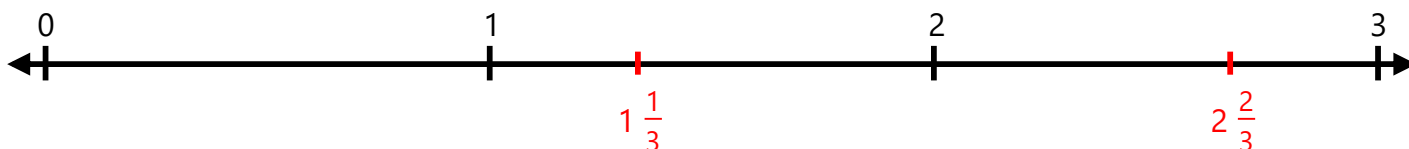
1.  $2\frac{2}{3}$      $\frac{2}{3}$



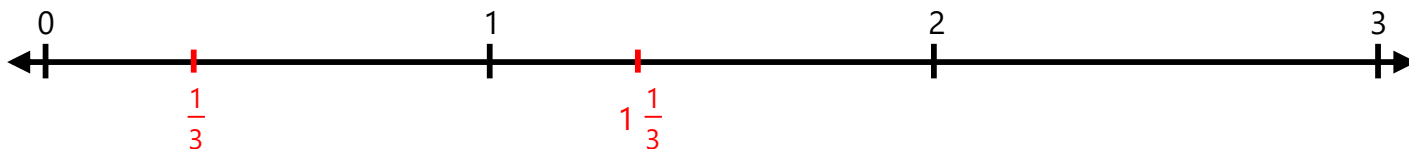
2.  $2\frac{1}{3}$      $\frac{1}{3}$



3.  $1\frac{1}{3}$      $2\frac{2}{3}$



4.  $1\frac{1}{3}$      $\frac{1}{3}$



5.  $\frac{1}{3}$      $1\frac{1}{3}$

