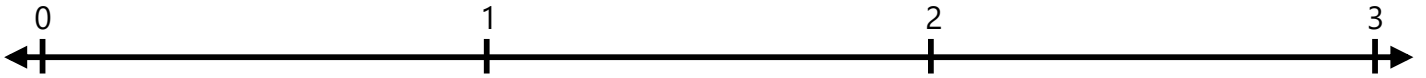


Number Lines - Fractions

Identify where each set of points should be placed on the number lines below.

1. $1\frac{2}{3}$ $2\frac{2}{3}$



2. $2\frac{1}{3}$ $1\frac{1}{3}$



3. $\frac{2}{3}$ $1\frac{2}{3}$



4. $1\frac{2}{3}$ $\frac{1}{3}$



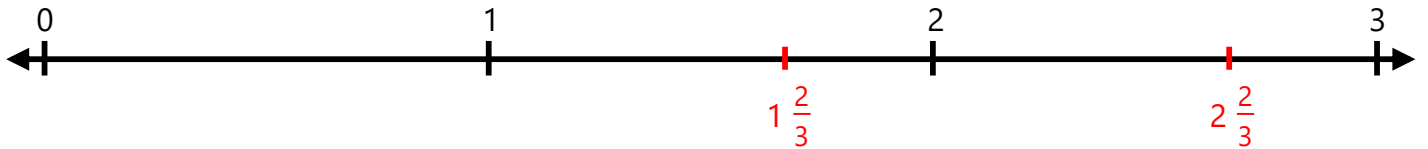
5. $2\frac{2}{3}$ $\frac{1}{3}$



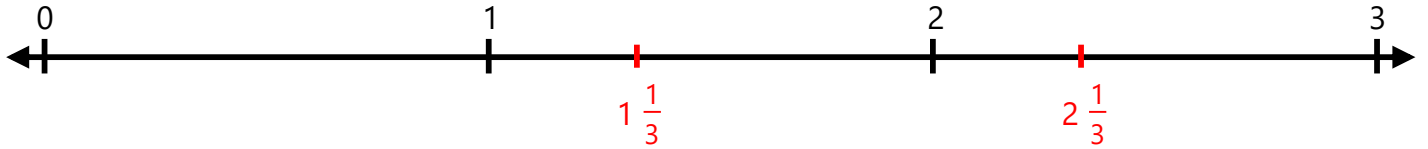
Number Lines - Fractions

Identify where each set of points should be placed on the number lines below.

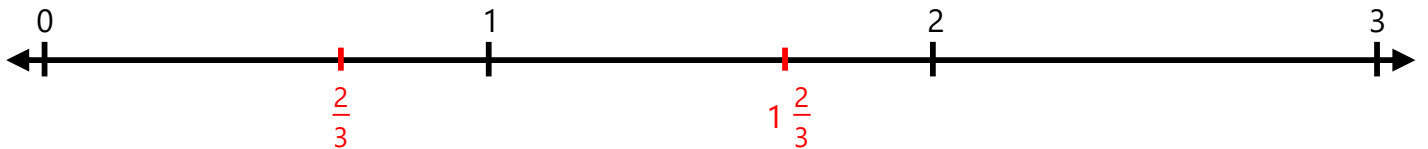
1. $1\frac{2}{3}$ $2\frac{2}{3}$



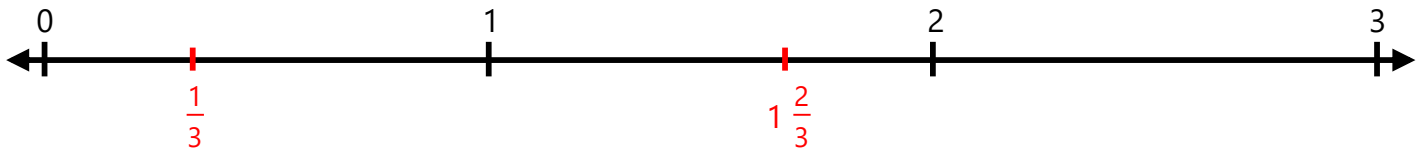
2. $2\frac{1}{3}$ $1\frac{1}{3}$



3. $\frac{2}{3}$ $1\frac{2}{3}$



4. $1\frac{2}{3}$ $\frac{1}{3}$



5. $2\frac{2}{3}$ $\frac{1}{3}$

