


Number Lines - Fractions

Identify where each set of points should be placed on the number lines below.

1. $7\frac{1}{3}$ $5\frac{1}{3}$



2. $5\frac{2}{3}$ $7\frac{2}{3}$



3. $7\frac{1}{3}$ $5\frac{2}{3}$



4. $5\frac{2}{3}$ $7\frac{1}{3}$



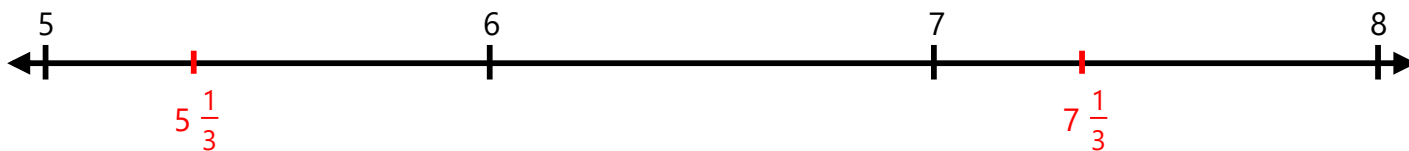
5. $7\frac{2}{3}$ $6\frac{1}{3}$



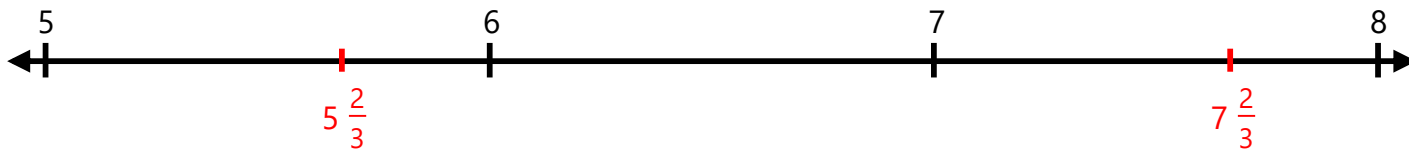
Number Lines - Fractions

Identify where each set of points should be placed on the number lines below.

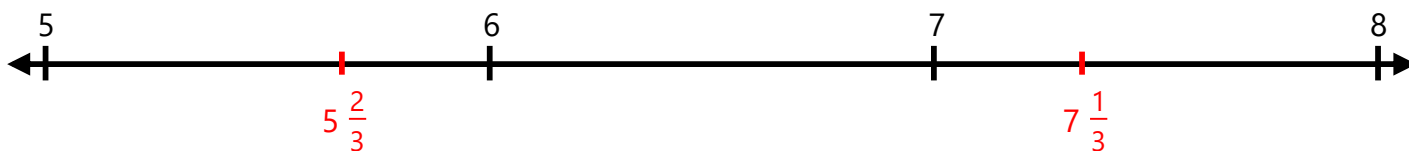
1. $7\frac{1}{3}$ $5\frac{1}{3}$



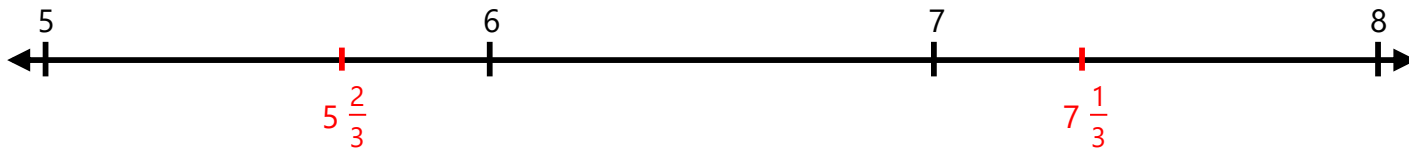
2. $5\frac{2}{3}$ $7\frac{2}{3}$



3. $7\frac{1}{3}$ $5\frac{2}{3}$



4. $5\frac{2}{3}$ $7\frac{1}{3}$



5. $7\frac{2}{3}$ $6\frac{1}{3}$

