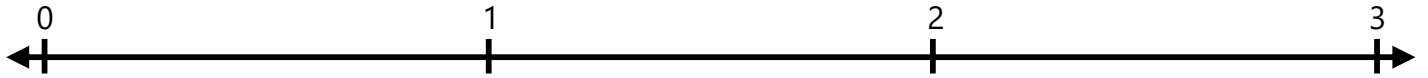



Number Lines - Fractions

Identify where each set of points should be placed on the number lines below.

1. $\frac{1}{4}$ $1\frac{3}{4}$



2. $1\frac{3}{4}$ $\frac{1}{2}$



3. $\frac{1}{2}$ $2\frac{3}{4}$



4. $2\frac{1}{2}$ $\frac{1}{2}$



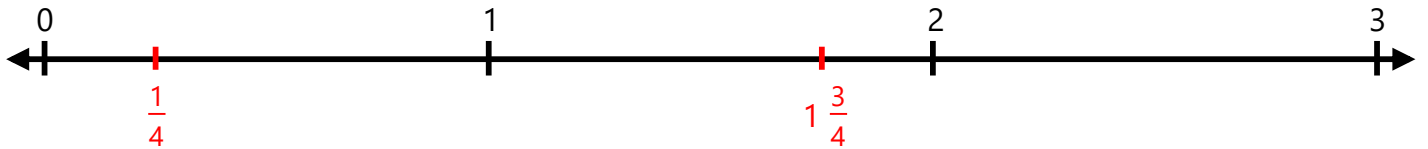
5. $\frac{3}{4}$ $2\frac{3}{4}$




Number Lines - Fractions

Identify where each set of points should be placed on the number lines below.


1. $\frac{1}{4}$ $1\frac{3}{4}$




2. $1\frac{3}{4}$ $\frac{1}{2}$



3. $\frac{1}{2}$ $2\frac{3}{4}$



4. $2\frac{1}{2}$ $\frac{1}{2}$



5. $\frac{3}{4}$ $2\frac{3}{4}$

