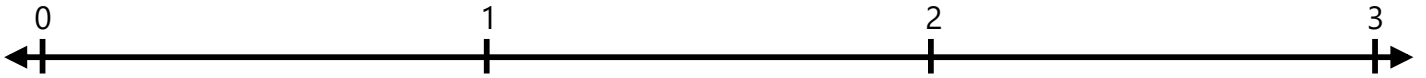


Number Lines - Fractions

Identify where each set of points should be placed on the number lines below.

1. $1\frac{4}{5}$ $\frac{1}{5}$



2. $\frac{4}{5}$ $2\frac{1}{5}$



3. $2\frac{4}{5}$ $\frac{2}{5}$



4. $1\frac{2}{5}$ $\frac{2}{5}$



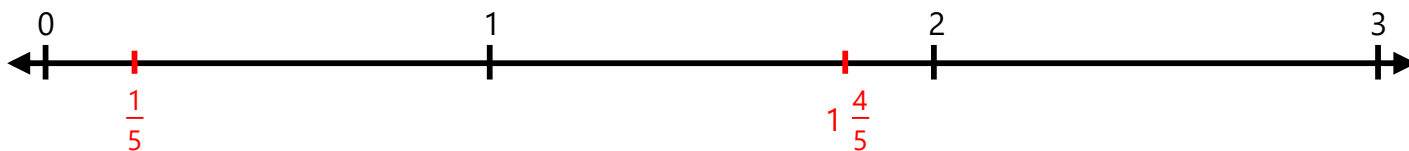
5. $\frac{4}{5}$ $1\frac{3}{5}$



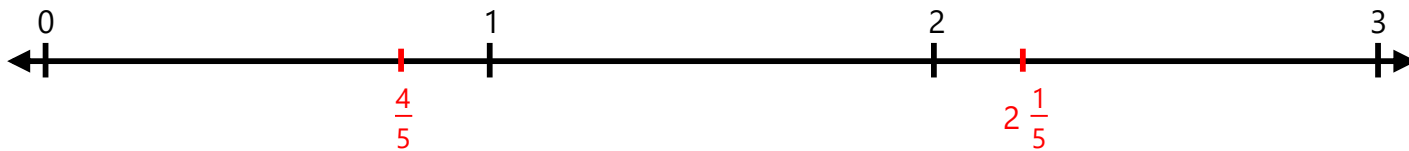
Number Lines - Fractions

Identify where each set of points should be placed on the number lines below.

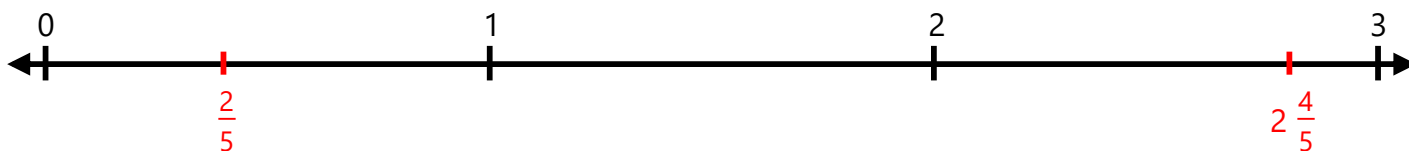
1. $1\frac{4}{5}$ $\frac{1}{5}$



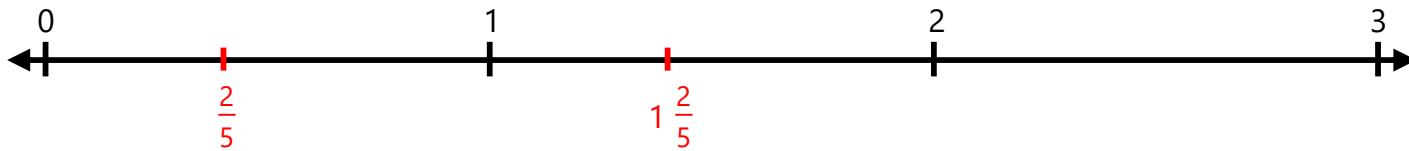
2. $\frac{4}{5}$ $2\frac{1}{5}$



3. $2\frac{4}{5}$ $\frac{2}{5}$



4. $1\frac{2}{5}$ $\frac{2}{5}$



5. $\frac{4}{5}$ $1\frac{3}{5}$

