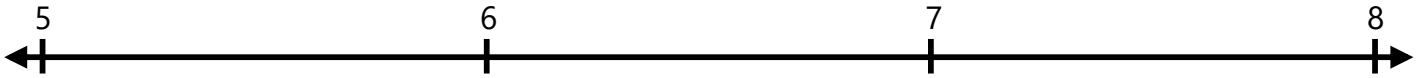



Number Lines - Fractions

Identify where each set of points should be placed on the number lines below.

1. $7\frac{2}{5}$ $6\frac{3}{5}$



2. $7\frac{2}{5}$ $6\frac{2}{5}$



3. $7\frac{3}{5}$ $5\frac{1}{5}$



4. $5\frac{4}{5}$ $7\frac{1}{5}$



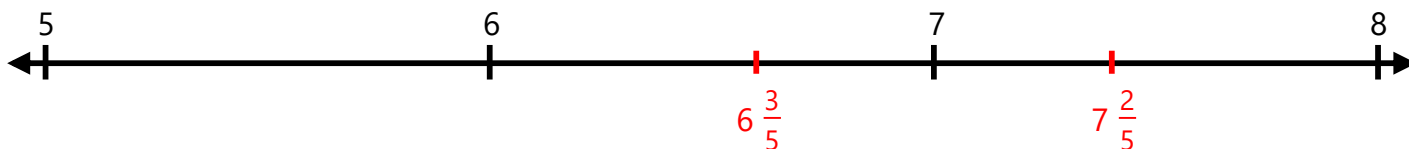
5. $6\frac{4}{5}$ $5\frac{1}{5}$



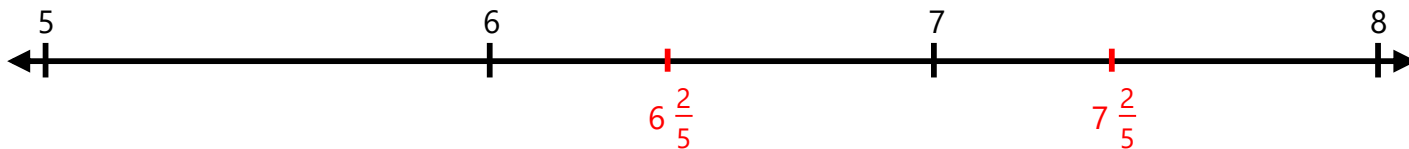
Number Lines - Fractions

Identify where each set of points should be placed on the number lines below.

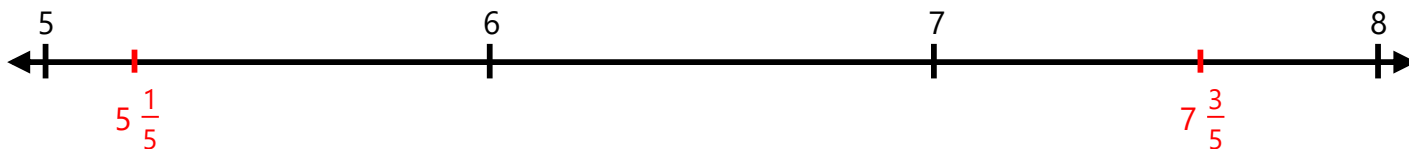
1. $7\frac{2}{5}$ $6\frac{3}{5}$




2. $7\frac{2}{5}$ $6\frac{2}{5}$



3. $7\frac{3}{5}$ $5\frac{1}{5}$



4. $5\frac{4}{5}$ $7\frac{1}{5}$



5. $6\frac{4}{5}$ $5\frac{1}{5}$

