

Integers 0-10

Identify and label where each set of points should be placed on the number lines below.

1. 2, 9



2. 3, 6



3. 3, 1



4. 6, 4



5. 8, 3



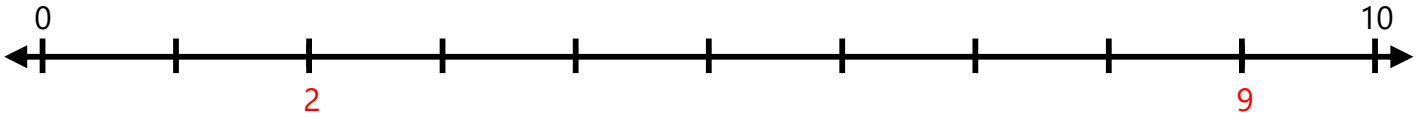
6. 8, 9



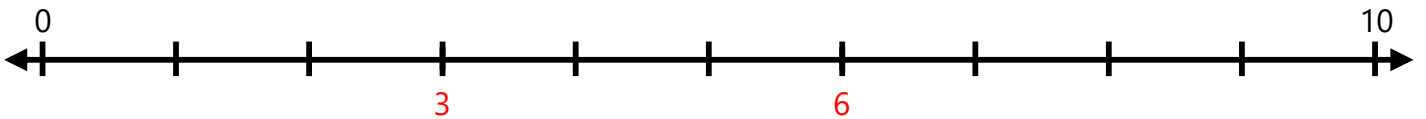
Integers 0-10

Identify and label where each set of points should be placed on the number lines below.

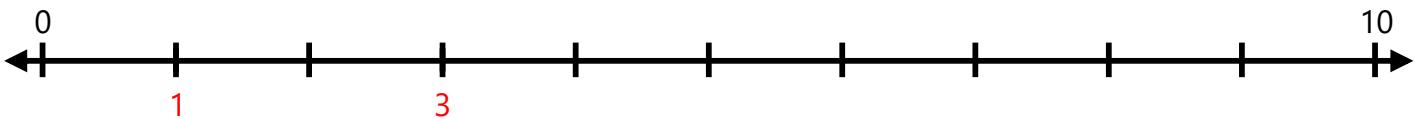
1. 2, 9



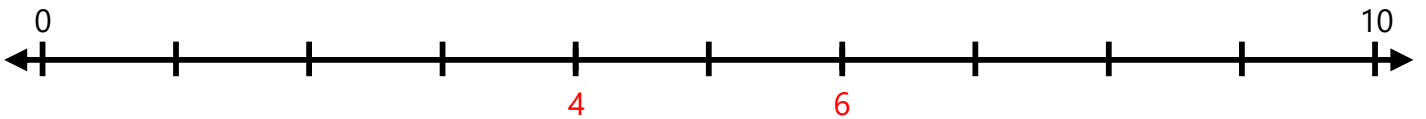
2. 3, 6



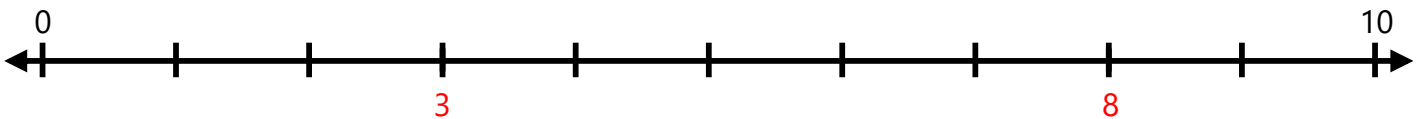
3. 3, 1



4. 6, 4



5. 8, 3



6. 8, 9

