

Integers 0-10

Identify and label where each set of points should be placed on the number lines below.

1. 196, 174



2. 96, 80



3. 128, 160



4. 32, 132



5. 92, 112



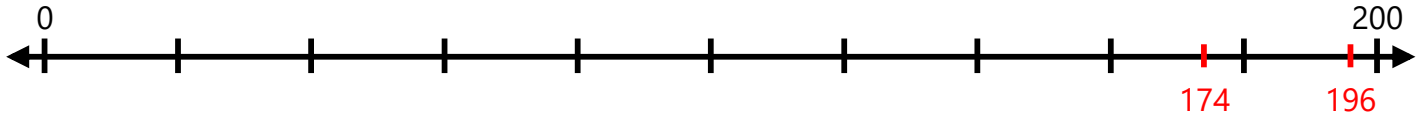
6. 62, 112



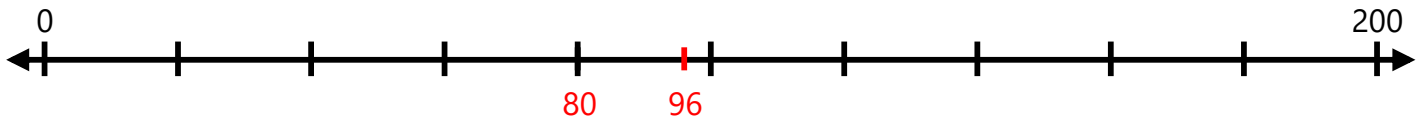
Integers 0-10

Identify and label where each set of points should be placed on the number lines below.

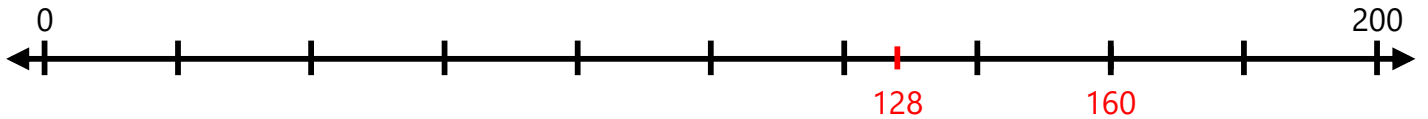
1. 196, 174



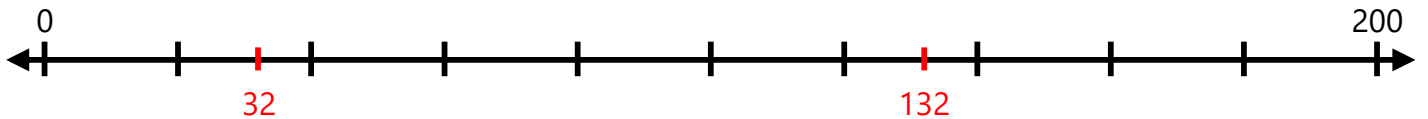
2. 96, 80



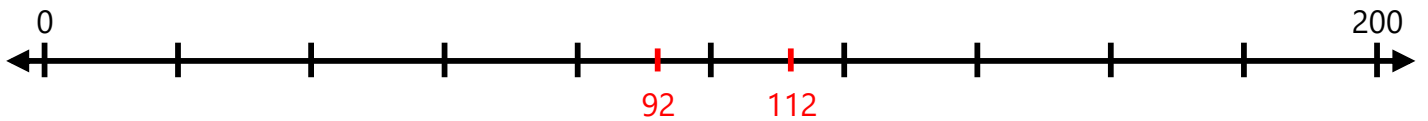
3. 128, 160



4. 32, 132



5. 92, 112



6. 62, 112

