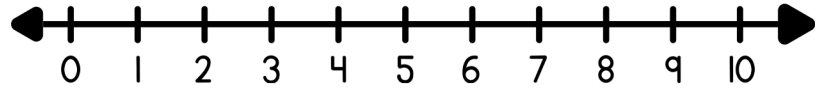
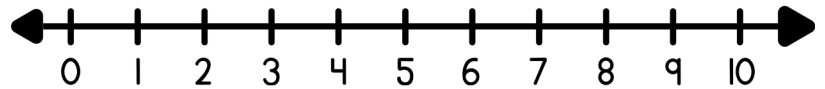


Find the sum using the number line.

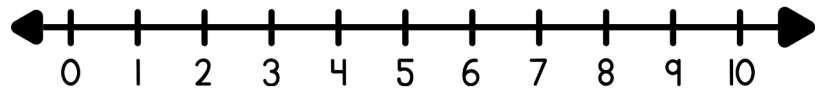
$5 + 3 = \square$



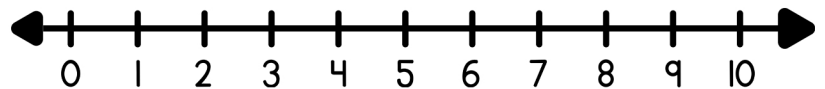
$1 + 2 = \square$



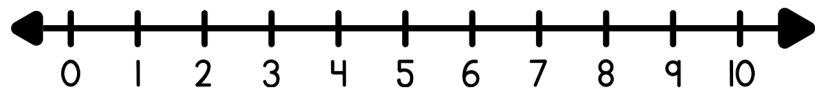
$7 + 1 = \square$



$4 + 4 = \square$



$6 + 2 = \square$



$3 + 7 = \square$

