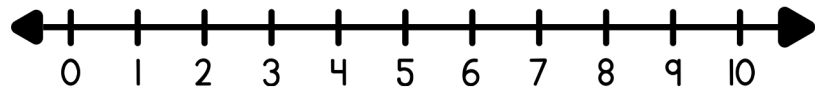
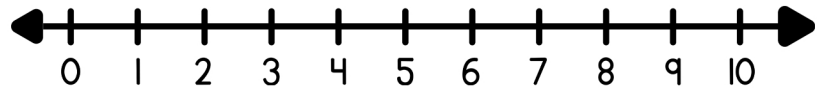


Find the sum using the number line.

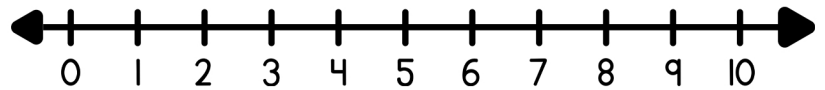
$7 + 2 = \square$



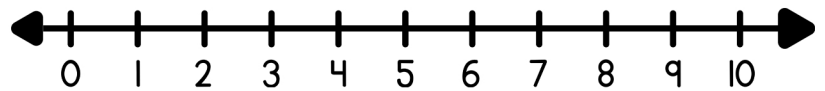
$1 + 3 = \square$



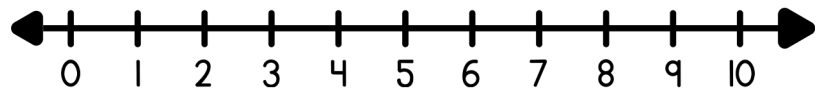
$6 + 2 = \square$



$2 + 4 = \square$



$8 + 2 = \square$



$5 + 4 = \square$

