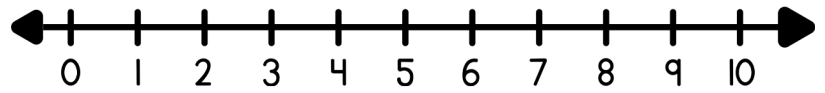
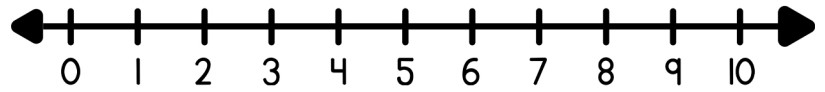


Find the sum using the number line.

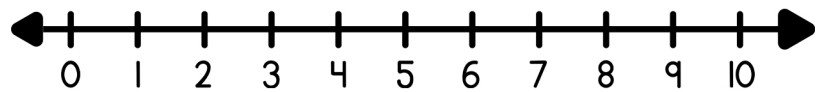
$1 + 4 = \square$



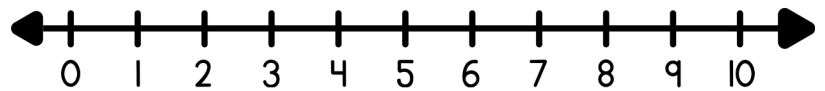
$3 + 6 = \square$



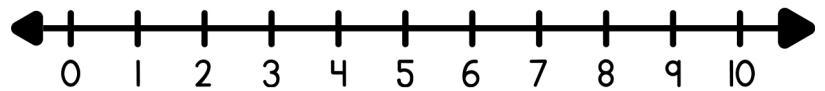
$6 + 2 = \square$



$5 + 1 = \square$



$2 + 9 = \square$



$4 + 4 = \square$

