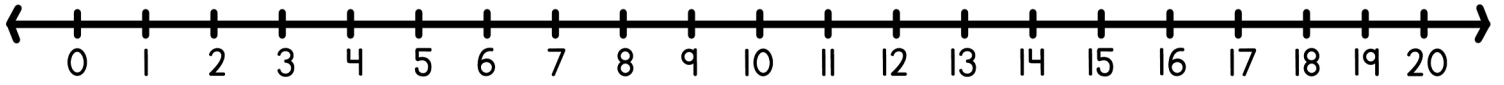
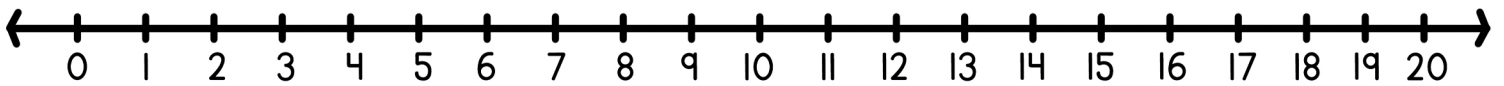


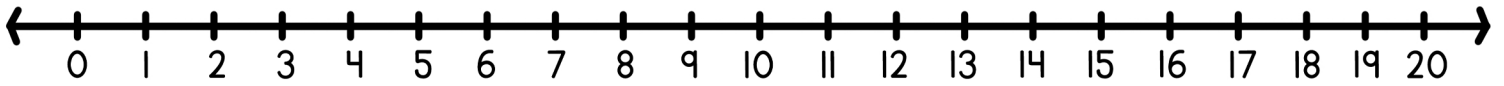
Find each sum using the number line.



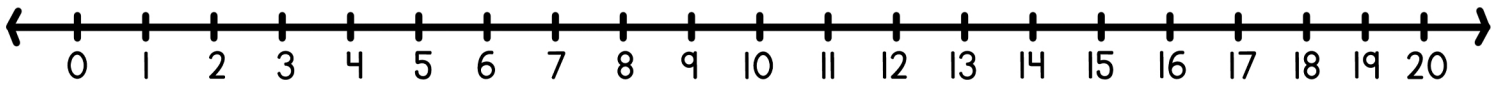
$3 + 6 = \square$ $8 + 5 = \square$ $11 + 8 = \square$



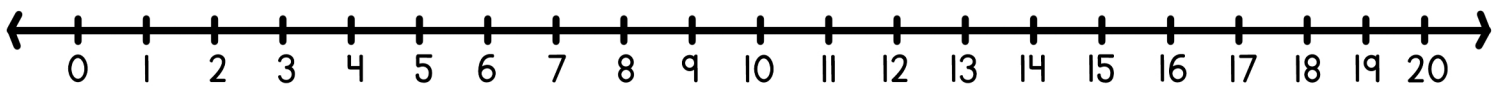
$5 + 9 = \square$ $9 + 6 = \square$ $11 + 5 = \square$



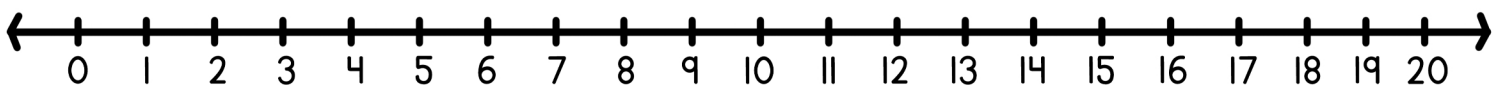
$3 + 2 = \square$ $5 + 5 = \square$ $4 + 3 = \square$



$1 + 7 = \square$ $8 + 9 = \square$ $3 + 7 = \square$



$9 + 2 = \square$ $5 + 8 = \square$ $1 + 9 = \square$



$8 + 2 = \square$ $0 + 5 = \square$ $2 + 7 = \square$