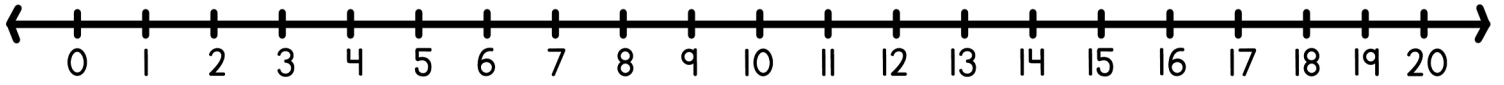
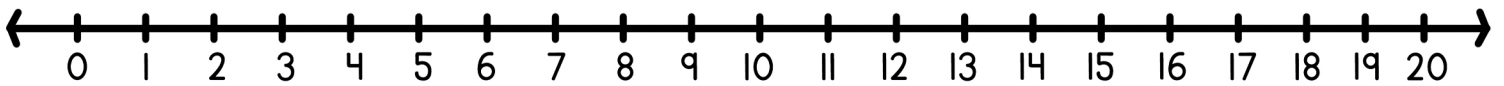


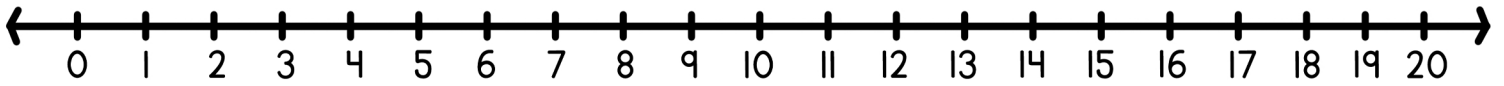
Find each sum using the number line.



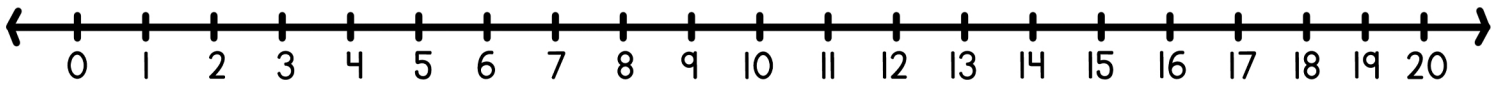
$3 + 4 = \square$ $8 + 9 = \square$ $4 + 2 = \square$



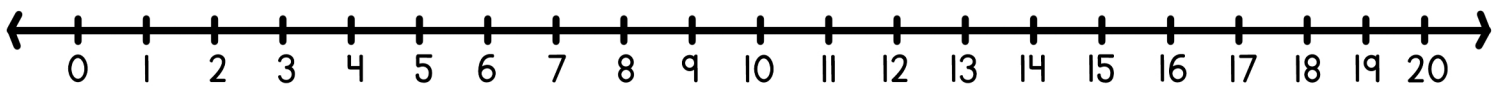
$2 + 6 = \square$ $5 + 5 = \square$ $7 + 8 = \square$



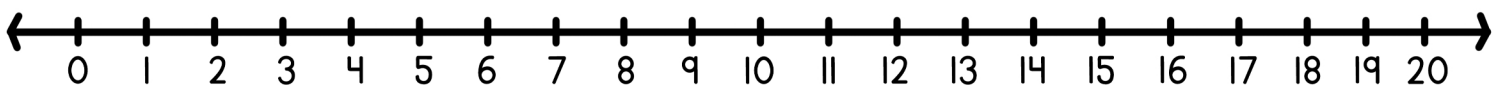
$4 + 5 = \square$ $6 + 7 = \square$ $4 + 4 = \square$



$7 + 6 = \square$ $4 + 2 = \square$ $8 + 6 = \square$



$3 + 3 = \square$ $3 + 4 = \square$ $11 + 8 = \square$



$2 + 4 = \square$ $9 + 7 = \square$ $9 + 4 = \square$