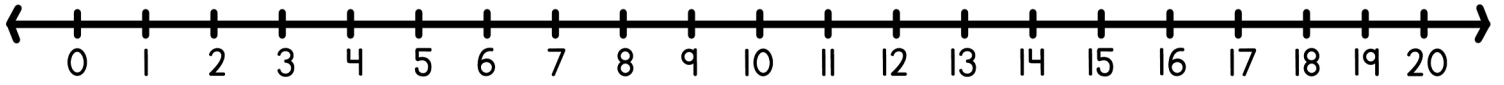
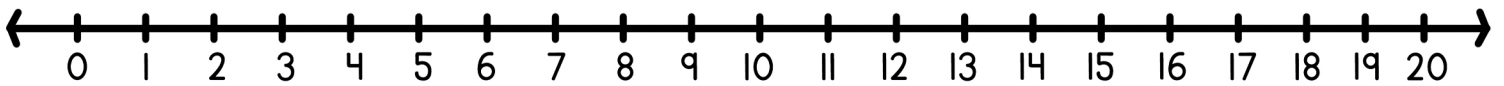


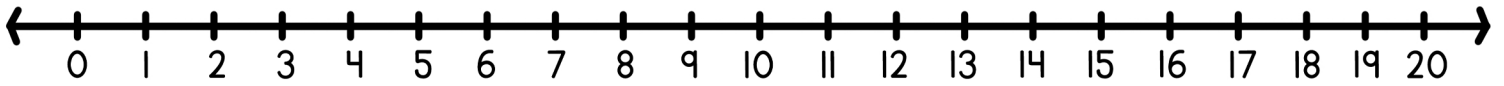
Find each sum using the number line.



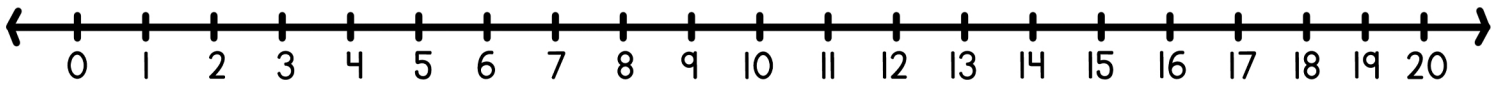
$8 + 4 = \square$ $9 + 4 = \square$ $5 + 5 = \square$



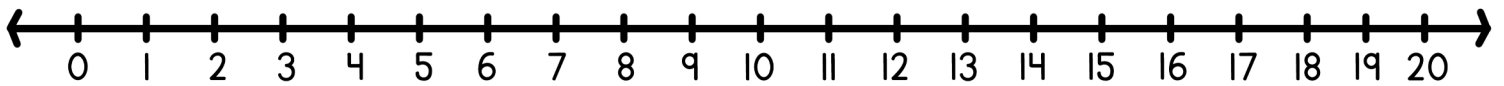
$2 + 9 = \square$ $6 + 1 = \square$ $7 + 8 = \square$



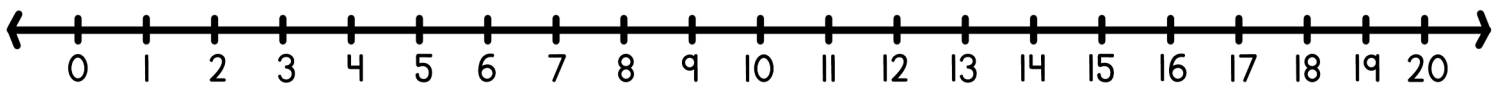
$3 + 5 = \square$ $8 + 4 = \square$ $5 + 6 = \square$



$8 + 5 = \square$ $9 + 2 = \square$ $1 + 8 = \square$



$5 + 2 = \square$ $4 + 3 = \square$ $6 + 7 = \square$



$8 + 2 = \square$ $5 + 8 = \square$ $4 + 7 = \square$