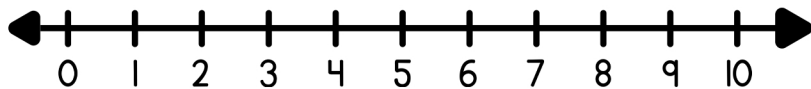
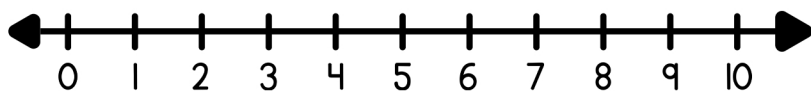


Solve each word problem using the number line and write the equation below.



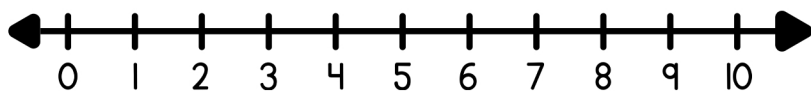
$$\square + \square = \square$$

Alex found 3 marbles on the playground, and Lily discovered 5 more. How many marbles do they have now?



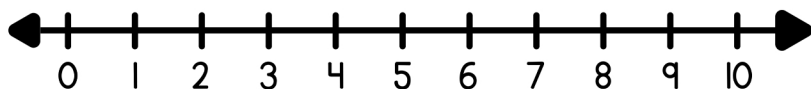
$$\square + \square = \square$$

Jake had 1 toy car, and he bought 2 more at the store. How many toy cars does Jake have in total?



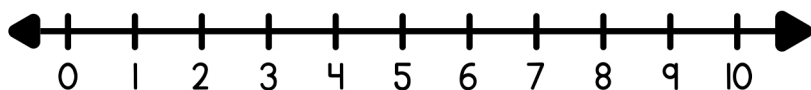
$$\square + \square = \square$$

Hannah had 3 candies, and Jake gave her 2 more. How many candies does Hannah have now?



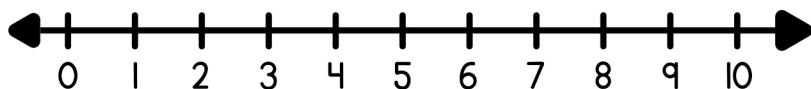
$$\square + \square = \square$$

Ben found 1 seashell at the beach, and Emma found 4 more. How many seashells do they have in total?



$$\square + \square = \square$$

Zoe had 2 balloons, and her friend gave her 3 more. How many balloons does Zoe have altogether?



$$\square + \square = \square$$

Liam has 2 red balloons, and Olivia has 3 blue balloons. How many balloons do they have altogether?