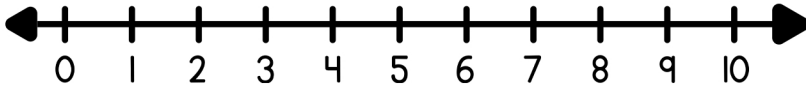
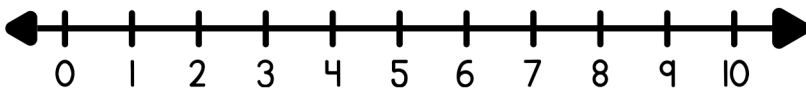


Solve each word problem using the number line and write the equation below.



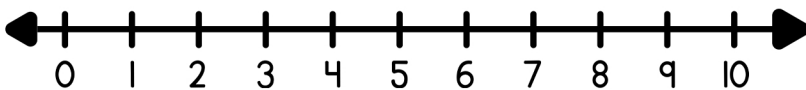
Sofia has 4 toy cars, and Noah gave her 1 more. How many toy cars does Sofia have now?

$$\square + \square = \square$$



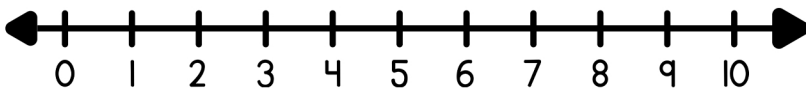
Mason has 1 cookie, and Chloe has 2 more. How many cookies do they have in total?

$$\square + \square = \square$$



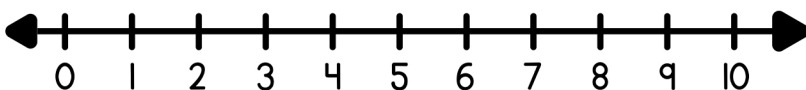
Zoe has 3 stickers, and Aiden has 1. How many stickers do they have together?

$$\square + \square = \square$$



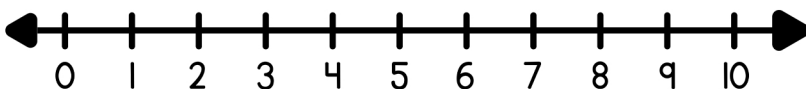
Ethan has 1 kite, and Lily has 4 more. How many kites do they have altogether?

$$\square + \square = \square$$



Ava has 2 apples, and Noah has 3 more. How many apples do they have in total?

$$\square + \square = \square$$



Mia has 1 teddy bear, and Jake has 3 more. How many teddy bears do they have together?

$$\square + \square = \square$$