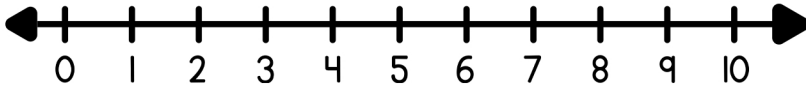
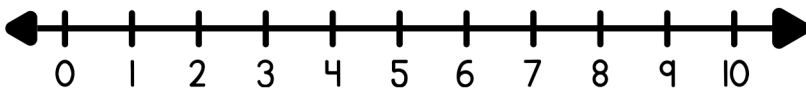


Solve each word problem using the number line and write the equation below.



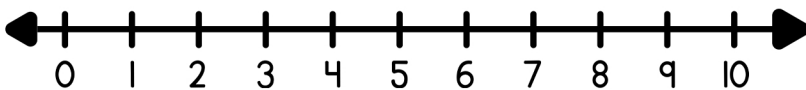
Emily has 2 cats and Sam has 4 dogs. How many pets do they have all together?

$$\square + \square = \square$$



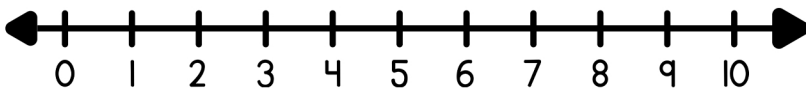
Oliver has 3 markers, and Emma has 2 more. How many markers do they have in total?

$$\square + \square = \square$$



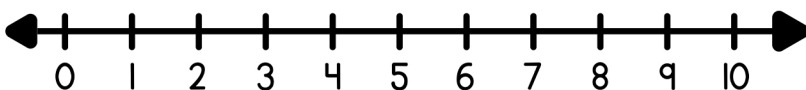
Grace has 1 cupcake, and Liam has 3 more. How many cupcakes do they have altogether?

$$\square + \square = \square$$



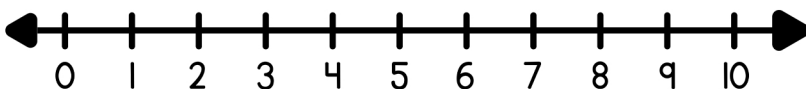
Zoe has 4 crayons, and Aiden has 1 more. How many crayons do they have together?

$$\square + \square = \square$$



Ethan has 1 toy train, and Lily has 4 more. How many toy trains do they have in total?

$$\square + \square = \square$$



Olivia has 2 cookies, and Noah has 2 more. How many cookies do they have altogether?

$$\square + \square = \square$$