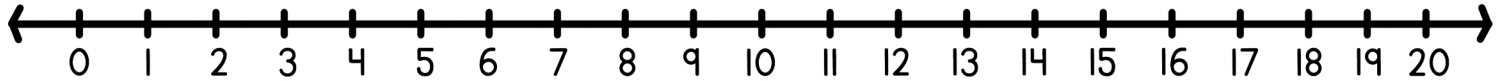
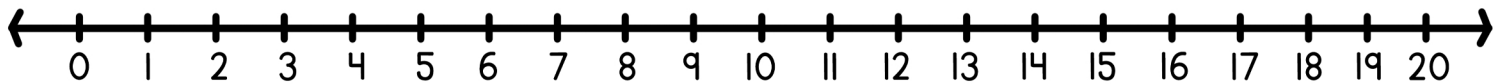


Solve each word problem using the number line and write the equation below.



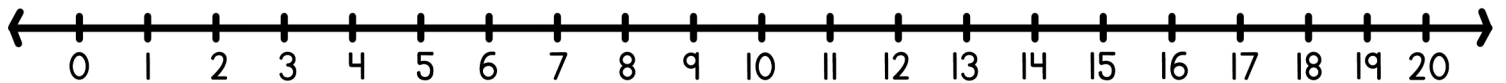
On Monday, Alex found 5 pebbles in the garden. On Tuesday, he discovered 8 more. How many pebbles does Alex have now?

$$\square + \square = \square$$



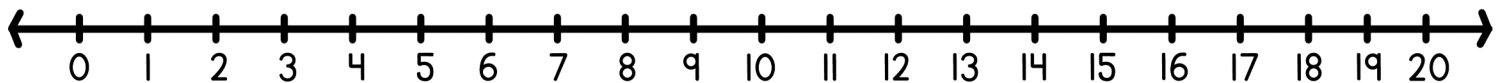
Emma had 7 pink ribbons for her art project. She bought 10 more at the store. How many ribbons does Emma have in total?

$$\square + \square = \square$$



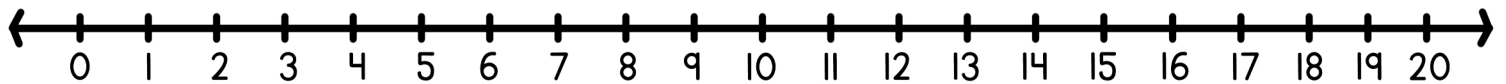
On Wednesday, Liam caught 9 fish at the pond. On Thursday, he caught 6 more. How many fish did Liam catch in total?

$$\square + \square = \square$$



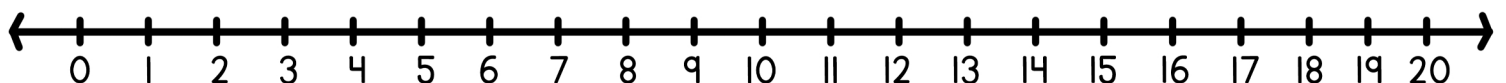
Olivia has 12 red apples in her basket. She picked 5 more from the tree. How many apples does Olivia have now?

$$\square + \square = \square$$



On Saturday, Wanda saw 6 blue jays at her bird feeder. On Sunday she saw 11 sparrows. How many birds did Wanda see over the weekend?

$$\square + \square = \square$$



On Friday, Zoe collected 8 colorful shells at the beach. On Saturday, she found 11 more. How many shells does Zoe have now?

$$\square + \square = \square$$