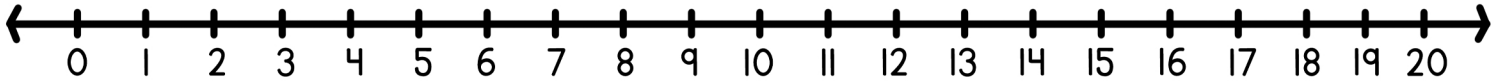
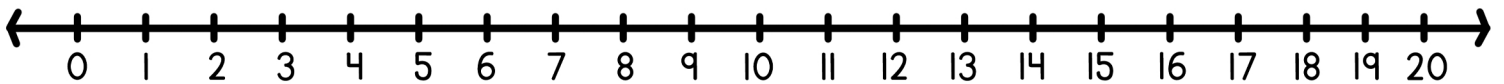


Solve each word problem using the number line and write the equation below.



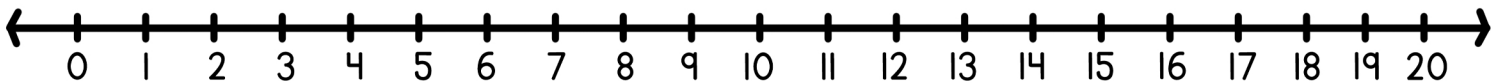
Chloe had 14 pink flowers in her garden. She planted 6 more. How many flowers does Chloe have in total?

$$\square + \square = \square$$



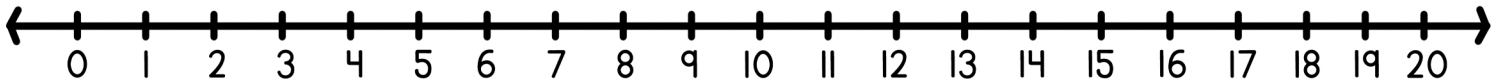
Noah counted 17 butterflies in the park. Later, he saw 2 more. How many butterflies did Noah see altogether?

$$\square + \square = \square$$



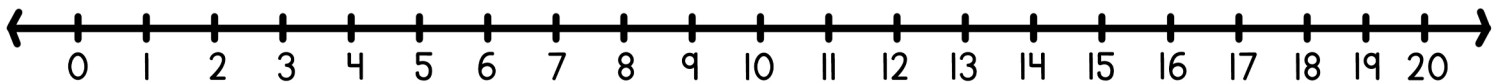
Ethan had 19 green marbles in his bag. He bought 1 more at the store. How many marbles does Ethan have now?

$$\square + \square = \square$$



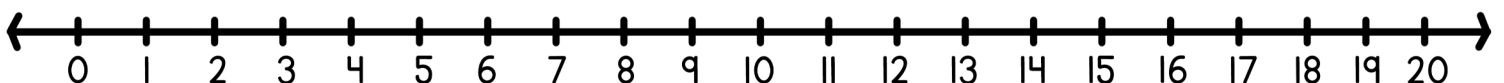
On Sunday, Lily baked 13 chocolate cookies. On Monday, she baked 6 more. How many cookies did Lily bake in total?

$$\square + \square = \square$$



Aiden had 16 yellow balloons for the party. He inflated 3 more. How many balloons does Aiden have in total?

$$\square + \square = \square$$



Ava had 18 seashells in her collection. She found 1 more on the beach. How many seashells does Ava have now?

$$\square + \square = \square$$