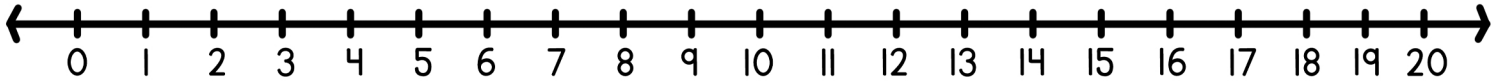
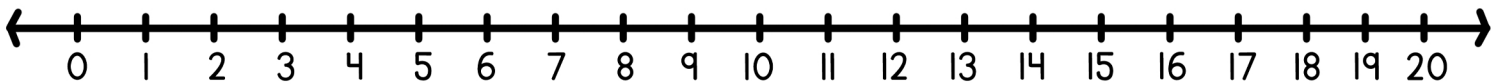


Solve each word problem using the number line and write the equation below.



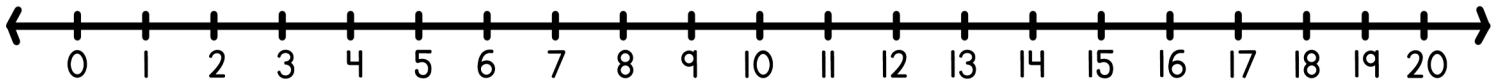
Jake had 20 red apples in his basket. He gave 3 to his friend. How many apples does Jake have left?

$$\square + \square = \square$$



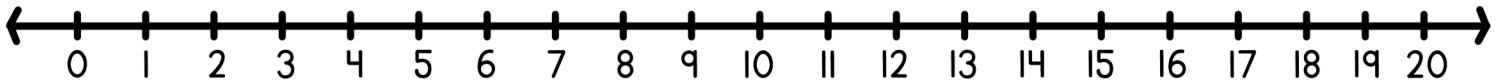
On Tuesday, Mia counted 10 birds in the park. On Wednesday, she saw 9 more. How many birds did Mia see in total?

$$\square + \square = \square$$



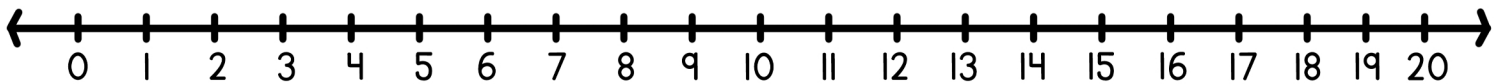
Oliver had 14 blue pencils in his art box. He bought 5 more. How many pencils does Oliver have in total?

$$\square + \square = \square$$



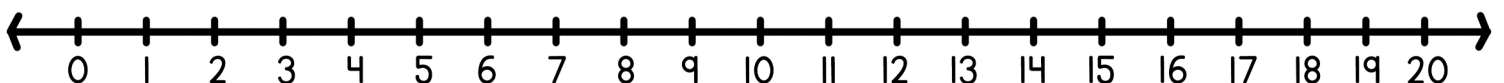
On Thursday, Grace spotted 11 ladybugs in the garden. On Friday, she found 8 more. How many ladybugs did Grace spot in total?

$$\square + \square = \square$$



Benjamin had 19 green frogs in his pond. He caught 1 more. How many frogs does Benjamin have now?

$$\square + \square = \square$$



Lily had 20 colorful beads for her bracelet. She added 2 more. How many beads does Lily have in total?

$$\square + \square = \square$$