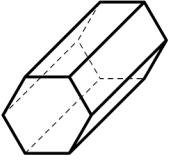
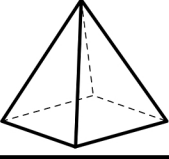

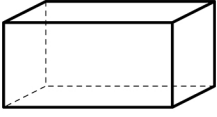
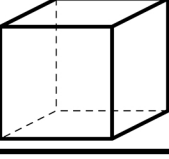
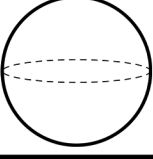
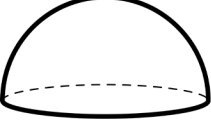
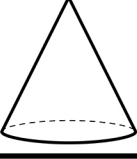
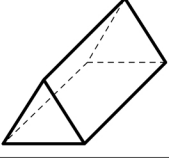


Name: _____

Date: _____

Record the number of faces, vertices, and edges attributes. Draw two real-life objects.

Shape	Attributes	Real World Object #1	Real World Object #2
	_____ faces _____ vertices _____ edges		
	_____ faces _____ vertices _____ edges		
	_____ faces _____ vertices _____ edges		
	_____ faces _____ vertices _____ edges		
	_____ faces _____ vertices _____ edges		
	_____ faces _____ vertices _____ edges		
	_____ faces _____ vertices _____ edges		
	_____ faces _____ vertices _____ edges		
	_____ faces _____ vertices _____ edges		