



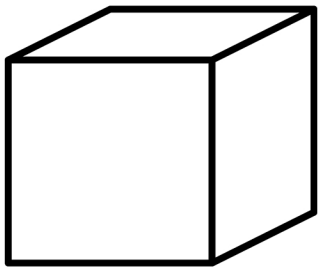
Circle the name that describes the shape.




1. hemisphere
2. pyramid
3. cylinder




1. sphere
2. cuboid
3. cube



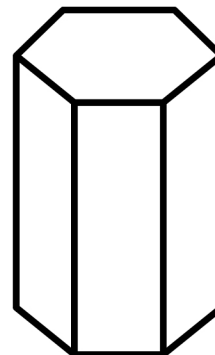
1. cube
2. cylinder
3. pyramid



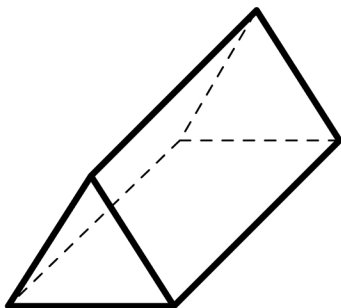
1. sphere
2. cube
3. cone




1. cone
2. sphere
3. hemisphere



1. hexagonal prism
2. pyramid
3. cuboid



1. cube
2. pyramid
3. triangular prism



1. cuboid
2. hemisphere
3. sphere