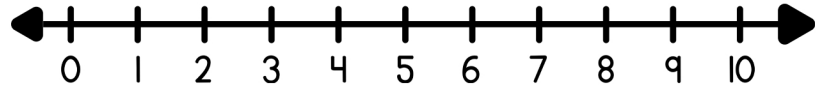
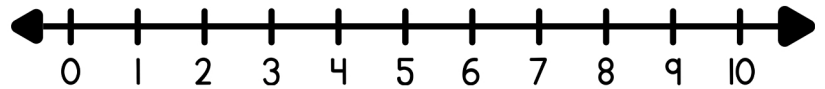


Find the difference using the number line.

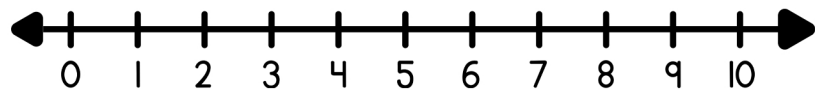
$1 - 1 = \square$



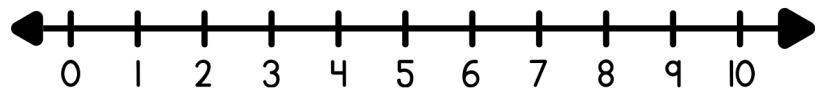
$3 - 2 = \square$



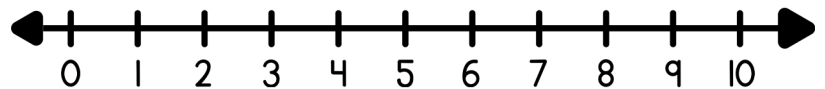
$6 - 5 = \square$



$9 - 2 = \square$



$6 - 1 = \square$



$7 - 3 = \square$

