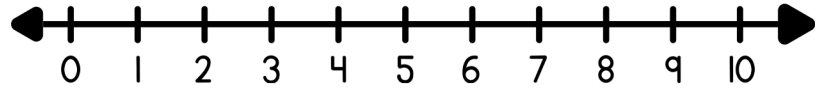
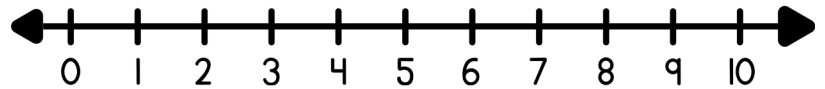


Find the difference using the number line.

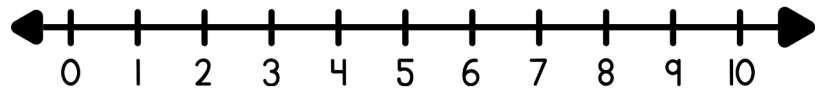
$6 - 3 = \square$



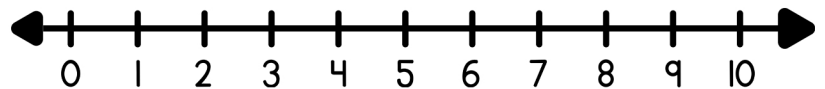
$4 - 2 = \square$



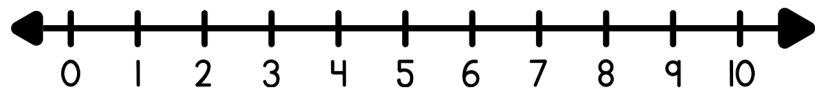
$7 - 4 = \square$



$6 - 1 = \square$



$5 - 2 = \square$



$9 - 6 = \square$

