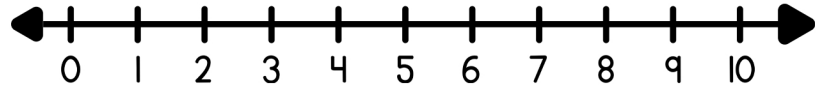
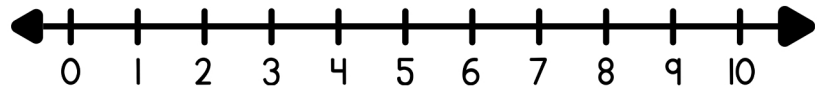


Find the difference using the number line.

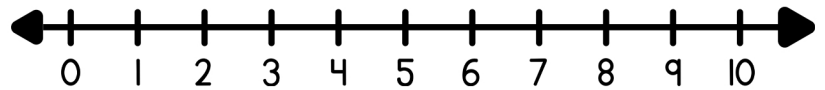
$7 - 2 = \square$



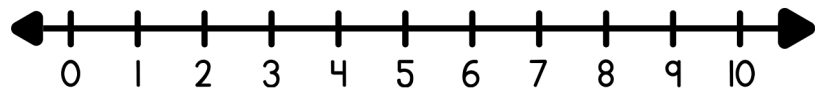
$5 - 3 = \square$



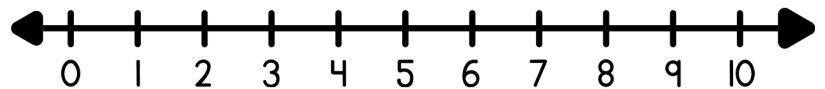
$6 - 1 = \square$



$9 - 2 = \square$



$6 - 4 = \square$



$2 - 2 = \square$

