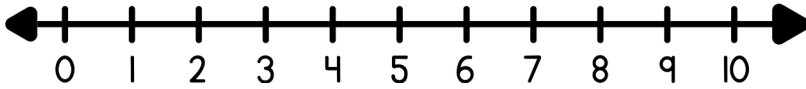
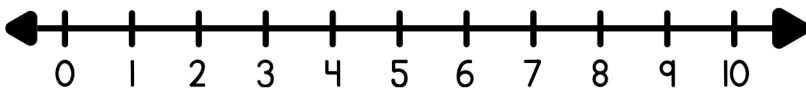


Solve each word problem using the number line and write the equation below.



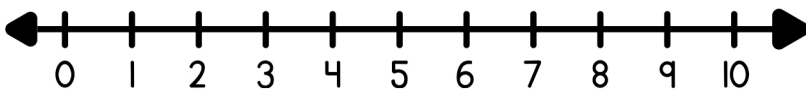
$$\square - \square = \square$$

Chloe had six seashells, but she found two more. How many seashells does Chloe have now?



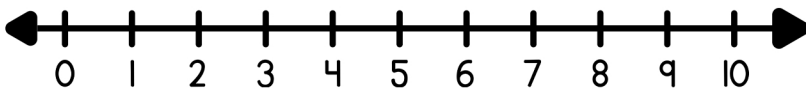
$$\square - \square = \square$$

Noah had eight markers, but he accidentally left three at school. How many markers does Noah have now?



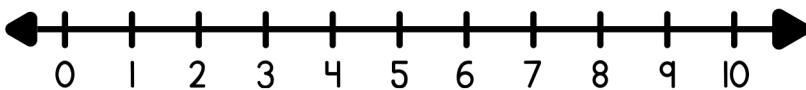
$$\square - \square = \square$$

Ethan had five cupcakes, but he gave two to his friend. How many cupcakes does Ethan have left?



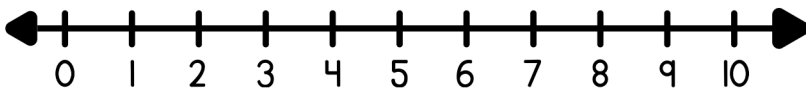
$$\square - \square = \square$$

Ava had ten teddy bears, but she donated seven. How many teddy bears does Ava have now?



$$\square - \square = \square$$

Liam had seven crayons, but he broke two. How many crayons does Liam have left?



$$\square - \square = \square$$

Grace had nine stickers, but she used five on her project. How many stickers does Grace have now?