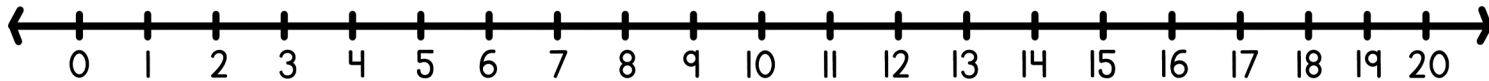
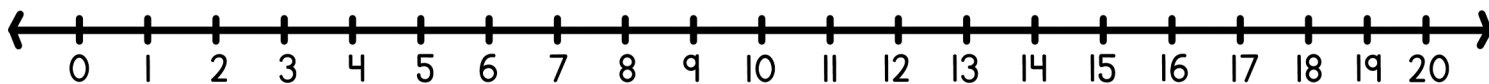


Solve each word problem using the number line and write the equation below.



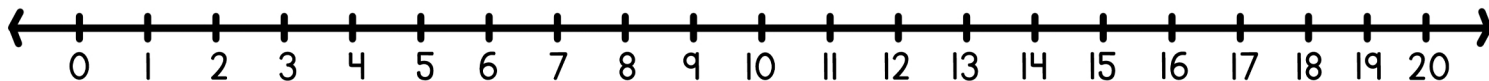
Emily had 15 candies, but she gave 6 to her friend. How many candies does Emily have now?

$$\square - \square = \square$$



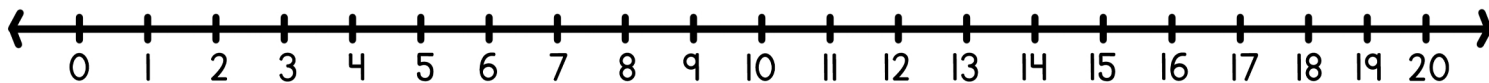
Liam had 18 toy cars, but he lost 7. How many toy cars does Liam have left?

$$\square - \square = \square$$



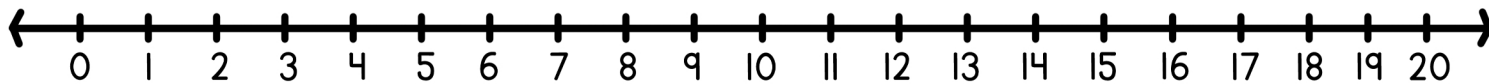
Mason had 14 marbles, but he gave 5 to his sister. How many marbles does Mason have now?

$$\square - \square = \square$$



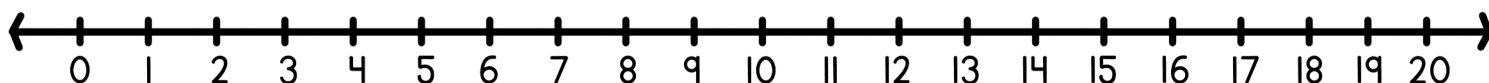
Zoe had 17 balloons, but 9 flew away. How many balloons does Zoe have left?

$$\square - \square = \square$$



Chloe had 20 cookies, but she ate 6. How many cookies does Chloe have now?

$$\square - \square = \square$$



Noah had 16 stickers, but he shared 8 with his classmates. How many stickers does Noah have left?

$$\square - \square = \square$$