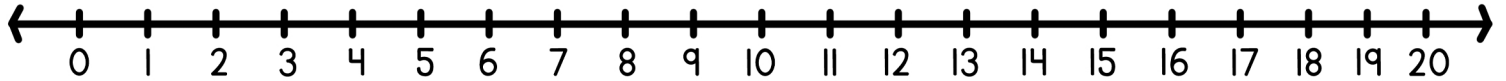
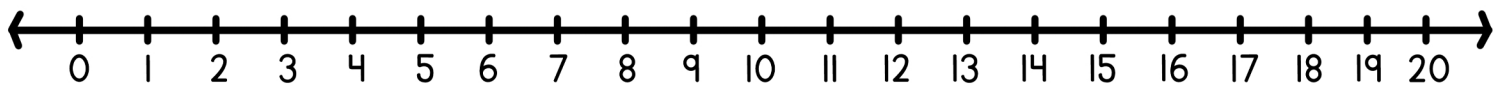


Solve each word problem using the number line and write the equation below.



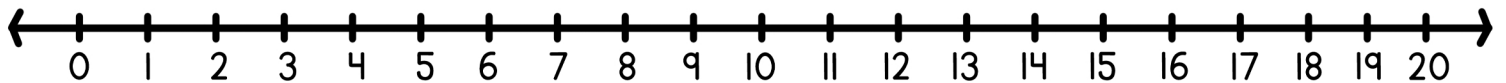
Ava had 19 apples, but she gave 4 to her brother. How many apples does Ava have now?

$$\square - \square = \square$$



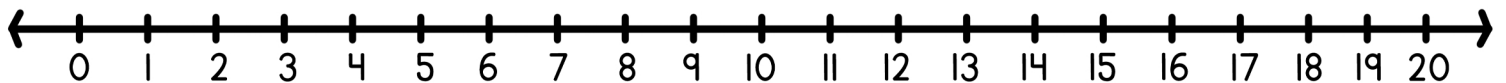
Jake had 13 cupcakes, but he shared 5 with his friends. How many cupcakes does Jake have left?

$$\square - \square = \square$$



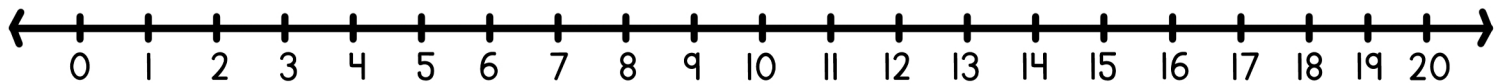
Benjamin had 17 markers, but he used 6. How many markers does Benjamin have left?

$$\square - \square = \square$$



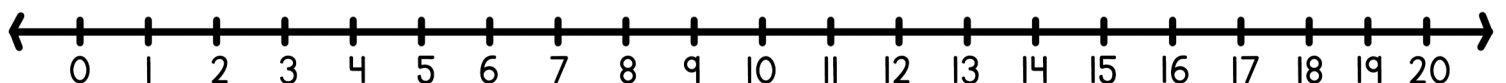
Oliver had 14 seashells, but he gave 7 to his cousin. How many seashells does Oliver have now?

$$\square - \square = \square$$



Grace had 18 butterflies in her collection, but 5 flew away. How many butterflies does Grace have left?

$$\square - \square = \square$$



Lily had 15 teddy bears, but she lost 2. How many teddy bears does Lily have now?

$$\square - \square = \square$$